



Neurological Nasties XXVII

www.mathxtc.com



1. Can you find the hidden meaning behind each of these ?

(a) LE / VEL

(b) KNEE
LIGHTS

(c) 0
MD
PHD
BSc
BEEd

(d) THINGS
PLEASE
MINDS

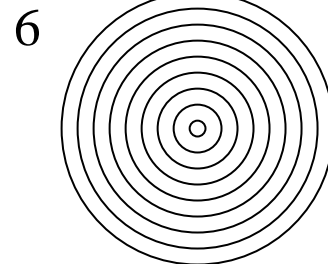

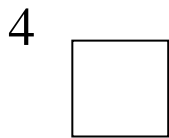
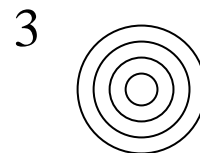
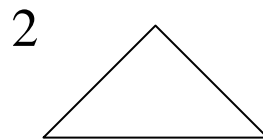
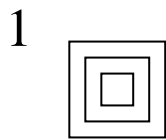
(e) TONE
TONE

(f) HE'S / HIMSELF

(g) R
R O A D S
A
D
S

(h) ECNALG

2. Study carefully the patterns of shapes below. Can you determine the next three in the series?



3. The number 24 has the following properties:

- It is one short of a square number. $24 + 1 = 25 = 5^2$
- Its double is also one less than a square number. $(24 \times 2) + 1 = 49 = 7^2$

Determine the next number which has the same property.
(Hint: Use a computer spreadsheet or calculator.)