

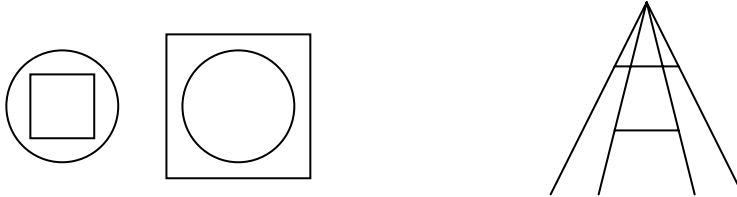


Neurological Nasties XXXI

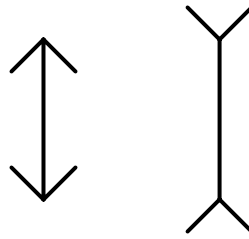
www.mathxtc.com



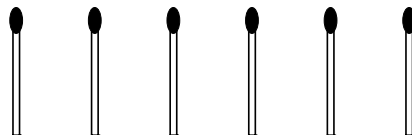
1. (a) Which is the larger circle ? (b) Which of the two horizontal lines is longer ?



- (c) In which of the figures is the vertical line longer ?



2. Add five matches to make nine.



3. Are you ready to try a 5×5 magic square ? Insert the remaining digits from 1 to 25 so that each row, column and corner-to-corner diagonal sums to 65.

		10		
				5
	25			
			20	
15				